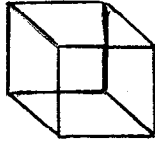


Directions: Fill in the following blanks. Make sure you are at the station with the correct 3-D model shape.

Cube



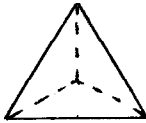
_____ edges _____ faces _____ vertexes

Cylinder



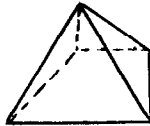
_____ edges _____ faces _____ vertexes

Triangular Pyramid



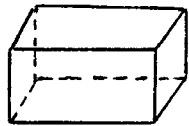
_____ edges _____ faces _____ vertexes

Square Pyramid



_____ edges _____ faces _____ vertexes

Rectangular Prism



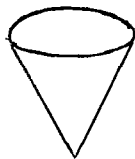
_____ edges _____ faces _____ vertexes

Triangular Prism



_____ edges _____ faces _____ vertexes

Cone



_____ edges _____ faces _____ vertexes