


How Is Your Timing?



Directions:

Take the challenge! Draw the correct time in the blank clock.





In 2 hours the time will be

$$\underline{\quad\quad} + \underline{\quad\quad} =$$



3 hours ago the time was

$$\underline{\quad\quad} + \underline{\quad\quad} =$$



In 6 hours the time will be

$$\underline{\quad\quad} + \underline{\quad\quad} =$$

